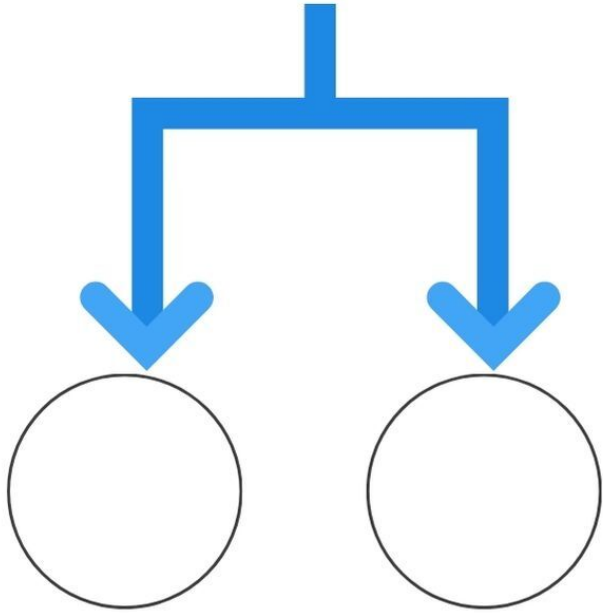
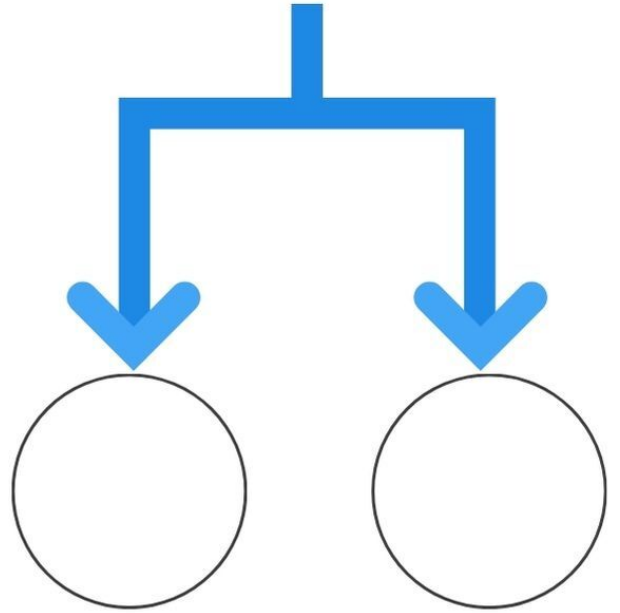


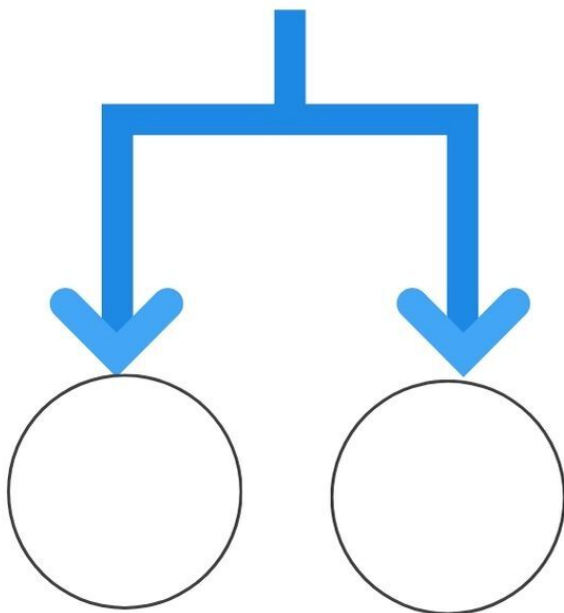
٤٣



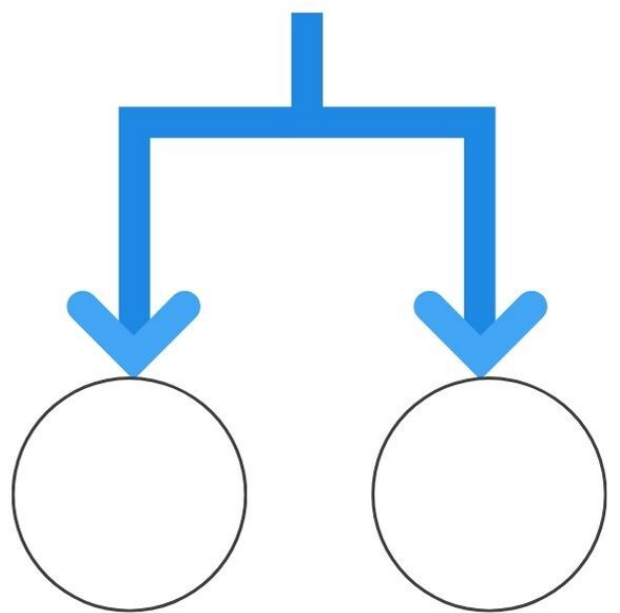
١٥






٦٥






١٦





صل الاشكال بالكسور



ضع علامة = ، < ، >

$$\bigcirc = 8 + 7$$

$$\bigcirc = 0 + 18$$

$$\bigcirc = 7 + 14$$

$$\bigcirc = 4 + 10$$

$$\bigcirc = 0 + 18$$

اجمع الارقام ثم اكتب الناتج الصحيح




الكرة

متوازي المستطيلات

الهرم

المكعب

الاسطوانة



صل الكلمة بالشكل المناسب



10 \_ 77 \_ 30 \_ 17

--	--	--	--

11 \_ 9 \_ 70 \_ 30

--	--	--	--

14 \_ 39 \_ 0 \_ 00

--	--	--	--

رتب الاعداد ترتيب تنازليا



١٧

٦٩

٣٥

٥٥

٦٣

٥٦

٣٩

١١

٨

١٨

٦٨

١٠

١٤

٣٦

٤٥




٦٦

٩


٥

ضع دائرة حول العدد الاكبر










$$= ٣ + ٣$$




$$= ٣ + ٢$$



$$= ١ + ٣$$




$$= ١ + ١$$



$$= ٣ + ٥$$


اجمع ثم صل بالرقم الصحيح





اكتب الرقم السابق أو الاوسط أو التالي






$$= 3 - 9$$



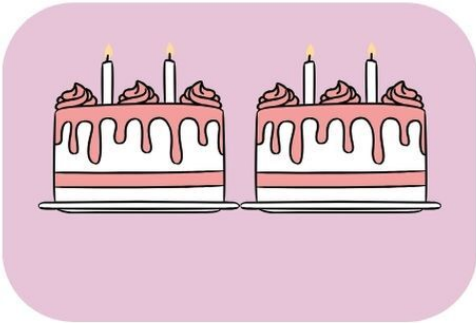
$$= 1 - 1$$



$$= 1 - 3$$



$$= 3 - 1$$



$$= 1 - 1$$

اطرح ثم صل بالرقم المناسب





=

٣

+



=

١

+



=

٥

+



=

٧

+



=

٨

+



عد الاشكال ثم اجمع واكتب الناتج الصحيح



$$0 = 1 + 4$$

$$0 = 3 + 6$$

$$0 = 4 + 7$$


$$0 = 5 + 16$$

$$0 = 4 + 11$$


$$0 = 7 + 9$$

اجمع ثم اكتب الناتج الصحيح







$$= 1 - 3$$




$$= 6 - 0$$




$$= 3 - 9$$




$$= 0 - 7$$



$$= 6 - 8$$



$$= 6 - 10$$



$$= 0 - 10$$

اطرح ثم اكتب الناتج الصحيح



١٦

٣ -

١٠

٦ -

٩

٥ -

٤

٦ -

٨




٣ -

٧

١ -



اطرح ثم اكتب الناتج الصحيح



اشرح الاشياء واكتب الناتج الصحيح