

□ □ □ ← ١٦ ٤٥ ٣١

□ □ □ ← ٥٥ ٣ ٥

□ □ □ ← ٤٤ ٣٨ ٦




□ □ □ ← ٦٦ ٨٥ ٧١

□ □ □ ← ٥٦ ٨٩ ٩




□ □ □ ← ١٠ ٤٣ ٧٦




رتب الاعداد ترتيبا تصاعديا






 =  + 

 =  + 

 =  + 

 =  + 

 =  + 

اجمع النجوم ثم اكتب الناتج الصحيح



$$\text{عشرات} \dots + \text{آحاد} \dots = 07$$

$$\text{عشرات} \dots + \text{آحاد} \dots = 16$$

$$\text{عشرات} \dots + \text{آحاد} \dots = 23$$

$$\text{عشرات} \dots + \text{آحاد} \dots = 18$$

$$\text{عشرات} \dots + \text{آحاد} \dots = 24$$

$$\text{عشرات} \dots + \text{آحاد} \dots = 49$$

$$\text{عشرات} \dots + \text{آحاد} \dots = 76$$


حلل الاعداد الي آحاد وعشرات






www.shremarts.com

٥٤




٤٥

٩




١٩

٦٦




٦٦

١٥






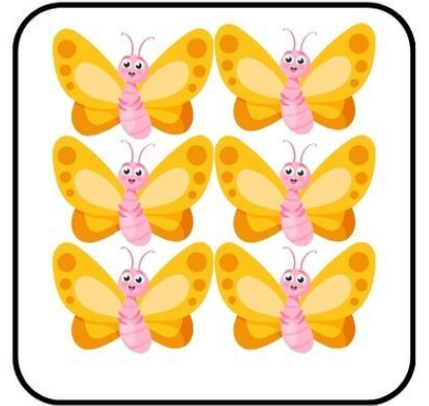

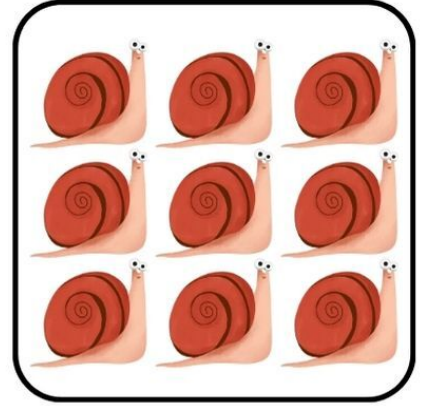




٦٤

٣١



٣٦

ضع علامة = ، < ، >




ضع علامة = ، < ، >







www.shremarts.com




$$| = 1 + 6$$




$$| = 6 + 0$$




$$| = 1 + 2$$



$$| = 0 + 6$$

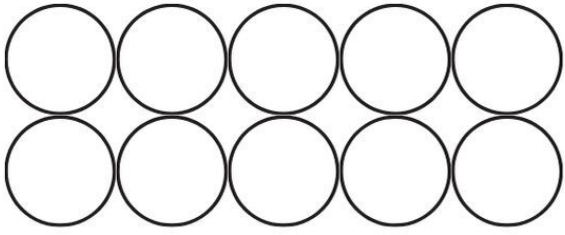


$$| = 1 + 1$$

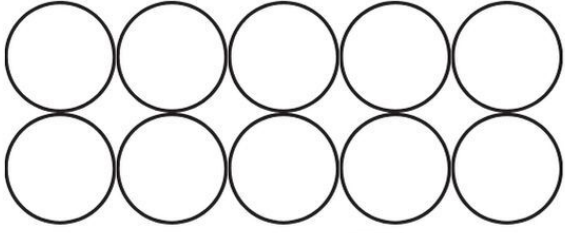


$$| = 2 + 3$$

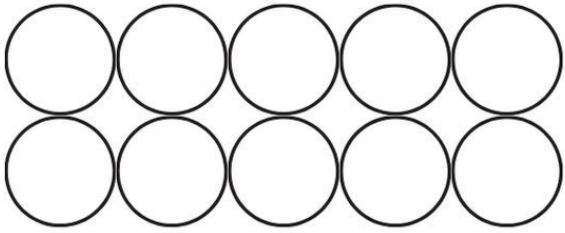
أجمع الأرقام ثم لون الدوائر حسب الناتج



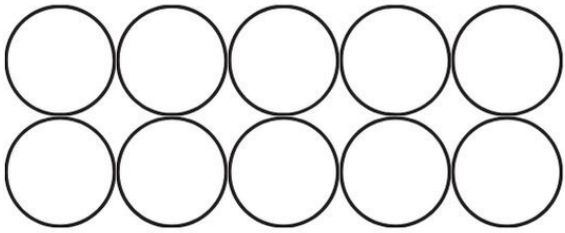
$$= ٣ - ٧$$



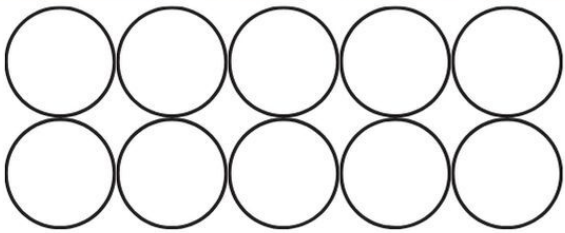
$$= ٥ - ١٠$$



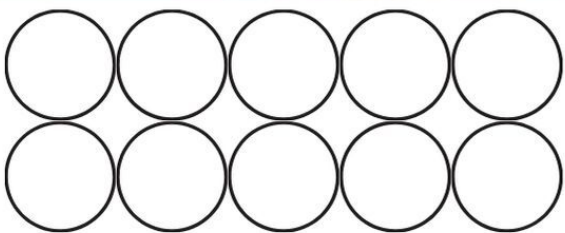
$$= ٦ - ٤$$



$$= ٠ - ٤$$






$$= ٦ - ٩$$



$$= ١ - ٥$$

إطرح الأرقام و لون الدوائر حسب الناتج





اجمع ، ثم اكتب الناتج الصحيح



$$\begin{array}{r} ٣١ \\ ٤١ \\ \hline \end{array} +$$

$$\begin{array}{r} ٦٦ \\ ١٦ \\ \hline \end{array} +$$

$$\begin{array}{r} ٤١ \\ ٦٦ \\ \hline \end{array} +$$

$$\begin{array}{r} ٦٦ \\ ٣٣ \\ \hline \end{array} +$$

$$\begin{array}{r} ١٠ \\ ١٨ \\ \hline \end{array} +$$

$$\begin{array}{r} ١٧ \\ ٤٠ \\ \hline \end{array} +$$

اجمع ثم اكتب الناتج



٦٦ -
٦٦ -

٤٤ -
١١ -

٣١ -
٦٠ -

٧٦ -
٣١ -

٦٥ -
١٠ -

٣٥ -
١٣ -

اطرح ، ثم اكتب الناتج الصحيح



٩ ٤٥

٥

٦٦ ٦٦

٣٦

٤٧ ٧٤

٥٥

اكتب العدد المناسب في الخانة الفارغة





www.shremarts.com

٧٠ - ١١ - ٤٣ - ٦٥ - ٦٠

--	--	--	--	--

٧ - ١٦ - ٩ - ٨٣ - ٥٤

--	--	--	--	--

١٠ - ٧٧ - ٩٣ - ٦٢ - ١١

--	--	--	--	--

رتب الاعداد من الاصغر الي الاكبر