



=




+




=



+



=



+



=



+



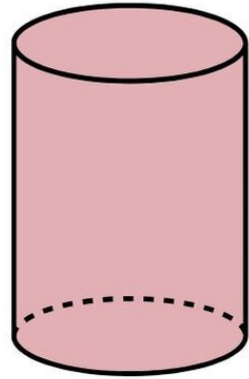
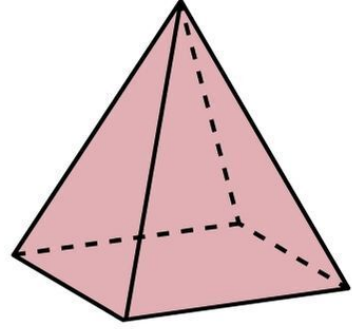
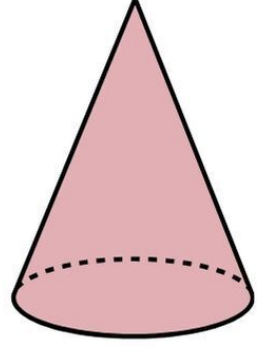
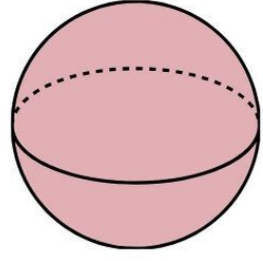
اجمع ثم اكتب الناتج الصحيح

هرم

أسطوانة

كرة

مخروط



مِل





٥ - ٩ - ٣

--	--	--

٦ - ١٠ - ١

--	--	--

رتب الاعداد من الاكبر إلي الاصغر



3

5

9

11

13

15

17

10

12

14

16

18

20

22

ضع علامة < أو > أو =



$$\square = 3 + 0$$

$$\square = 1 + 9$$

$$\square = 3 + 10$$

$$\square = 1 + 8$$

$$\square = 3 + 17$$

$$\square = 7 + 19$$

اجمع ثم اكتب الناتج الصحيح

١ ٦ ٤

٤ ٩ ٨

٣ ٥ ٧

٤ ٢ ١

ضع دائرة حول الرقم الاقل



10



10

3 + 1



13

1



3 + 0

1



1 - 0

3 - 1



0

11



1 + 9

ضع علامة = ، < ، >



$$3 - 8$$



$$0 - 7$$



$$0 - 0$$



$$1 - 4$$



$$6 - 9$$




$$4 - 1$$




ا طرح الارقام ثم اكتب الناتج الصحيح

1 - 3




7 - 7

1 - 9




7

1 - 3




3

3



3 - 8

8



8

< , > , = ضع علامة



www.shremarts.com

V

IV

٥٤

٤٥

٦٤

٤٥

١٠

٥

٤

١٥

٦٠

٦٣

ضع دائرة حول العدد الاصغر



www.shremarts.com

٣٠ - ٦٠ - ١٠

--	--	--

٤٣ - ٣٦ - ٥٤

--	--	--

٦٠ - ٨٠ - ١٠٠

--	--	--

رتب الاعداد ترتيب تصاعدي



www.shremarts.com

$$\square = 6 + 9$$

$$\square = 0 + 10$$

$$\square = 6 + 17$$

$$\square = 3 + 7$$

$$\square = 4 + 11$$

$$\square = 3 + 6$$

$$\square = 4 + 10$$

$$\square = 4 + 9$$

اجمع الارقام ثم اكتب الناتج الصحيح

١٦

٦٠

١٣

١٠

١٥

٩

٤ + ٥

١ + ٩

٥ + ١٠

٤ + ١٦

٦ + ١١

٩ + ٧

اجمع ثم صل بالنتائج الصحيح



10

—

0

7

—

6

7

—

1

9

—

9

17

—

7

17

—

8

اطرح الارقام ثم اكتب الناتج الصحيح



www.shremarts.com

١٥

١٥

٣٠

١١

١٩

٣٠

٣٤

١٥

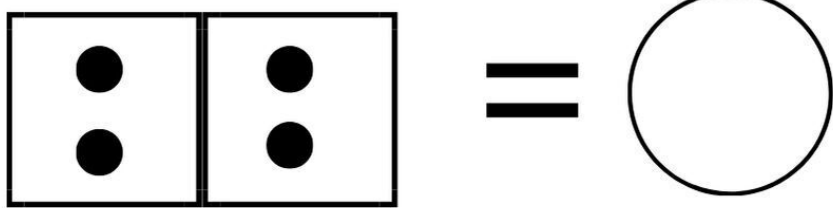
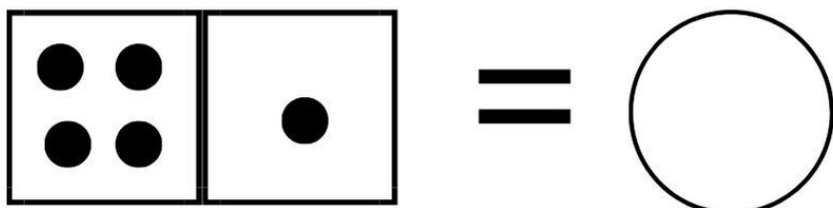
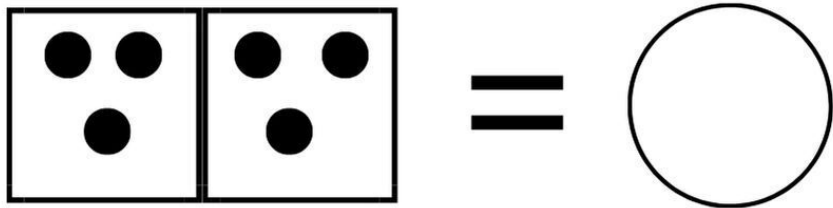
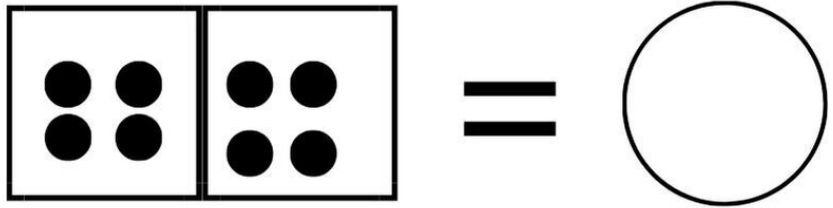
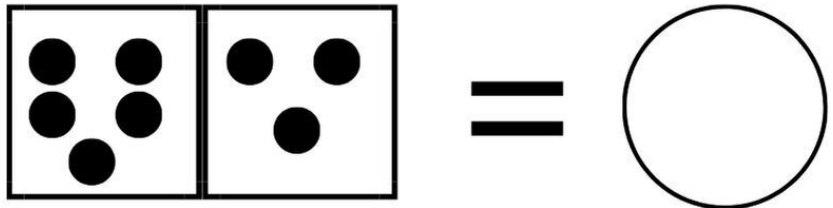
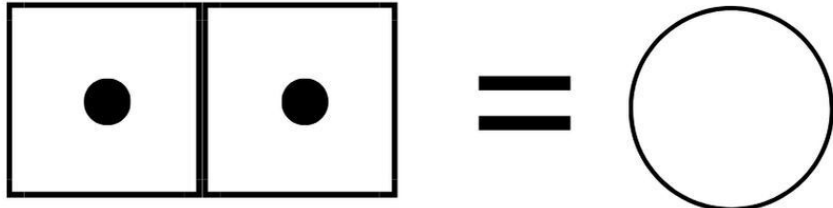
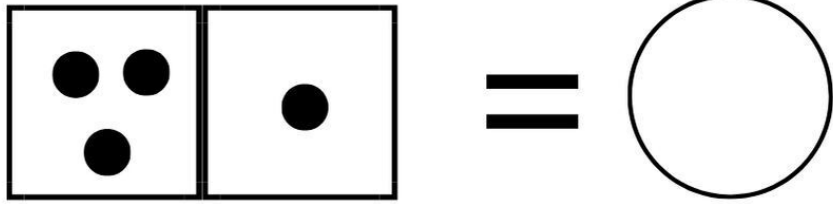
٧١

٧٠

١٣








١٣

ضع علامة = ، > ، <



اجمع النقاط ثم اكتب الناتج الصحيح





ضع علامة = , < , >

$$= ٣ - ٩$$

$$= ٠ - ٤$$

$$= ١ - ٠$$

$$= ٠ - ٩$$

$$= ٤ - ٤$$

$$= ٠ - ٦$$

$$= ٣ - ٦$$

$$= ٦ - ٦$$

$$= ٦ - ٨$$

$$= ٠ - ٧$$

$$= ٦ - ٠$$

$$= ١ - ٣$$

$$= ٣ - ٧$$

$$= ٣ - ٠$$

اطرح الارقام و اكتب الناتج الصحيح





٦٦ , ٩ , ٥ , ٣٥ , ٦٥ , ١٦

--	--	--	--	--	--

٦٦ , ٧ , ١٧ , ١٩ , ٥ , ٦

--	--	--	--	--	--

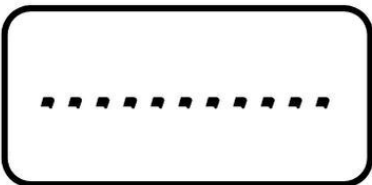
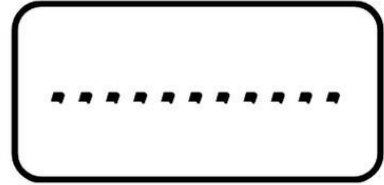

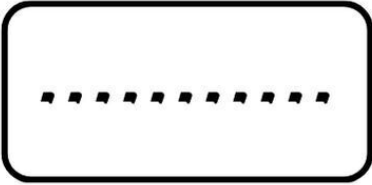

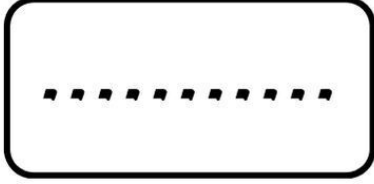

٣٣ , ٤٤ , ٦٦ , ١٩ , ١٧ , ٣

--	--	--	--	--	--

























رتب الاعداد من الاصغر الي الاكبر



www.shaemarts.com



اكتب اسم كل شكل من الاشكال

		10			00
		9			99
		90			٦٣
		٧٨			0٦
		٦٦			٩٨
		٦0			٧٦

اكتب العدد التالي





www.shaemarts.com

مربع

مثلث



دائرة

قلب




مثلث

مستطيل



مربع

دائرة



مستطيل

قلب



ضع دائرة حول الكلمة المناسبة للشكل